

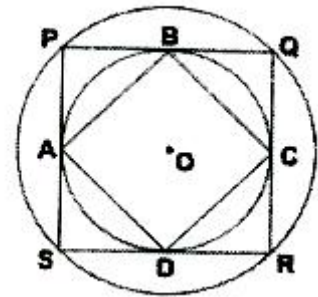
INDIAN ASSOCIATION OF PHYSICS TEACHERS
NATIONAL STANDARD EXAMINATION IN JUNIOR SCIENCE (NSEJS) 2019 – 20
Question Paper Code: 51
Held on: November 17, 2019

1. Let α and β be the roots of $x^2 - 5x + 3 = 0$ with $\alpha > \beta$. If $a_n = \alpha^n - \beta^n$ for $n \geq 1$ then the value of $\frac{3a_6 + a_8}{a_7}$ is
 (a) 2 (b) 3
 (c) 4 (d) 5

2. The number of triples (x, y, z) such that any one of these numbers is added to the product of the other two, the result is 2, is
 (a) 1 (b) 2
 (c) 4 (d) infinitely many

3. In rectangle ABCD, AB = 5 and BC = 3. Points F and G are on the line segment CD so that DF = 1 and GC = 2. Lines AF and BG intersect at E. What is the area of AEB?
 (a) 10 sq. units (b) $\frac{15}{2}$ sq. units
 (c) $\frac{25}{2}$ sq. units (d) 20 sq. units

4. In the given figure, two concentric circles are shown with centre O. PQRS is a square inscribed in the outer circle. It also circumscribes the inner circle, touching it at points B, C, D and A. What is the ratio of the perimeter of the outer circle to that of quadrilateral ABCD?
 (a) $\frac{\pi}{4}$ (b) $\frac{3\pi}{2}$
 (c) $\frac{\pi}{2}$ (d) π



5. How many positive integers N give a remainder 8 when 2008 is divided by N.
 (a) 12 (b) 13
 (c) 14 (d) 15

6. What is the product of all the roots of the equation $\sqrt{5|x| + 8} = \sqrt{x^2 - 16}$?
 (a) -64 (b) -24
 (c) 576 (d) 24

7. LCM of two numbers is 5775. Which of the following cannot be their HCF?
 (a) 175 (b) 231
 (c) 385 (d) 455

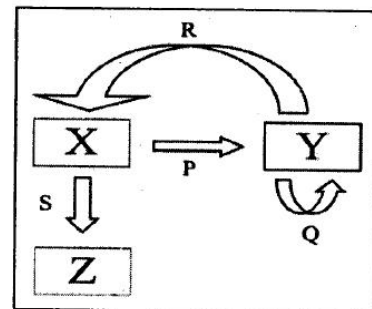
8. If a, b, c are distinct real numbers such that $a + \frac{1}{b} = b + \frac{1}{c} = c + \frac{1}{a}$ evaluate abc.
 (a) $\pm\sqrt{2}$ (b) $\sqrt{2} - 1$
 (c) $\sqrt{3}$ (d) ± 1

9. If the equation $(\alpha^2 - 5\alpha + 6)x^2 + (\alpha^2 - 3\alpha + 2)x + (\alpha^2 - 4) = 0$ has more than two roots, then the value of α is
- (a) 2 (b) 3
(c) 1 (d) none of these
10. Mr. X with his eight children of different ages is on a family trip. His oldest child, who is 9 years old saw a license plate with a 4 – digit number in which each of two digits appear two times. “Look daddy!” she exclaims. “That number is evenly divisible by the age of each of us kids!”. “That’s right,” replies Mr. X, “and the last two digits just happen to be my age”. Which of the following is not the age of one of Mr. X’s children?
- (a) 4 (b) 5
(c) 6 (d) 7
11. How many number lie between 11 and 1111 which divided by 9 leave a remainder 6 and when divided by 21 leave a remainder 12?
- (a) 18 (b) 28
(c) 8 (d) None of these
12. Two unbiased dice are rolled. What is the probability of getting a sum which is neither 7 nor 11?
- (a) $\frac{7}{9}$ (b) $\frac{7}{18}$
(c) $\frac{2}{9}$ (d) $\frac{11}{18}$
13. The solution of the equation $1 + 4 + 7 + \dots + x = 925$ is
- (a) 73 (b) 76
(c) 70 (d) 74
14. If $\tan \theta + \sec \theta = 1.5$, then value of $\sin \theta$ is
- (a) $\frac{5}{13}$ (b) $\frac{12}{13}$
(c) $\frac{3}{5}$ (d) $\frac{2}{3}$
15. An observer standing at the top of a tower, finds that the angle of elevation of a red bulb on the top of a light house of height H is α . Further, he finds that the angle of depression of reflection of the bulb in the ocean is β . Therefore, the height of the tower is
- (a) $\frac{H(\tan \beta - \tan \alpha)}{(\tan \beta + \tan \alpha)}$ (b) $\frac{H \sin(\beta - \alpha)}{\cos(\alpha + \beta)}$
(c) $\frac{H(\cos \alpha - \cos \beta)}{(\cot \alpha + \cot \beta)}$ (d) H
16. The sum of the roots of $\frac{1}{x+a} + \frac{1}{x+b} = \frac{1}{c}$ is zero. The product of roots is
- (a) 0 (b) $\frac{a+b}{2}$
(c) $-\frac{1}{2}(a^2 + b^2)$ (d) $2(a^2 + b^2)$

17. In the convex quadrilateral ABCD, the diagonals AC and BD meet at O and the measure of angle AOB is 30° . If the areas of triangle AOB, BOC, COD and AOD are 1, 2, 8 and 4 square units respectively, what is the product of the lengths of the diagonals AC and DB in sq. units?
 (a) 60 (b) 56
 (c) 54 (d) 64
18. If $\sin^2 x + \sin^2 y + \sin^2 z = 0$, then which of the following is NOT a possible value of $\cos x + \cos y + \cos z$?
 (a) 3 (b) -3
 (c) -1 (d) -2
19. Find the remainder when x^{51} is divided by $x^2 - 3x + 2$
 (a) x (b) $(2^{51} - 2)x + 2 - 2^{51}$
 (c) $(2^{51} - 1)x + 2 - 2^{51}$ (d) 0
20. In an equilateral triangle, three coins of radii 1 unit each are kept so that they touch each other and also sides of the triangle. The area of triangle ABC (in sq. units) is
 (a) $4 + 2\sqrt{3}$ (b) $4\sqrt{3} + 6$
 (c) $12 + \frac{7\sqrt{3}}{4}$ (d) $3 + \frac{7\sqrt{3}}{4}$
21. Gymnosperm are called 'naked seed bearing plants' because they lack:
 (a) Male gamete (b) Ovule
 (c) Ovary (d) Seeds
22. In case of mice coat colour, two genes are responsible for colour of the hair. Gene 'A' is responsible for distribution of pigments on shaft of hair. Wild type allele of 'A' produces a yellow band on dark hair shaft (agouti), whereas recessive allele produces no yellow band. There is another allele of A, known as A^Y , which is embryonic lethal in homozygous condition only. In an experiment, two yellow mice were crossed to obtain a progeny of 6 pups. What would be the most probable number of agouti mice among them?
 (a) 0 (b) 2
 (c) 4 (d) None of the above
23. A stain was developed by a group of scientists to stain a particular cell organelle. The stain was tested on various tissues derived from an autopsy sample from a mammal. The organelles were counted. The result showed maximum number of the organelles in cells of brain, lesser in cells of heart, least in mature sperms and absent in erythrocytes. Identify the organelles from following options.
 (a) Nissl bodies (b) Mitochondria
 (c) Golgi bodies (d) Endoplasmic reticulum
24. *Pinus sylvestris* grows at low temperatures in Russia. The plant survives under such freezing conditions due to the presence of:
 (a) Saturated lipids in plasma membrane (b) Glycoproteins in plasma membrane
 (c) Glycolipids in plasma membrane (d) Polyunsaturated lipids in plasma membrane

25. In an experiment setup, certain pathogen caused a disease in primates with nasal congestion, sore throat and fever being the common symptoms. The scientists injected an extract from blue – green mold as the first line of action. However, the symptoms did not subside. The possible causative agents of the disease were listed out as follows:
- i. a virus
 - ii. A fungus
 - iii. a conjugation deficient bacterium
 - iv. A tapeworm
- Choose the correct option from the following that indicate the pathogen.
- (a) i, ii
 - (b) i, iii
 - (c) ii, iv
 - (d) iii only
26. An organism has 27 pairs of homologous chromosomes. In each daughter cell after completion of meiosis II, ___ and ___ chromosomes would be present respectively.
- (a) 27 and 27
 - (b) 54 and 27
 - (c) 108 and 54
 - (d) 54 and 108
27. A group of students was studying development of an organism under controlled laboratory conditions. Following observations were made by them.
- i. The larvae has a rod – like supporting structure that separated the nervous system and the gut.
 - ii. A prominent central cavity was present in the transverse section of the part of the nervous system of the larvae; while the adults had cerebral ganglia as the main component of the nervous system.
 - iii. The eyes were prominently seen in larvae.
 - iv. The tails were absent in the adults, which the larvae had.
 - v. A lot of phagocytic activity was observed before conversion of larvae into adults.
 - vi. The adults has a cuticular exoskeleton.
- The organism under study must be belonging to:
- (a) Amphibia
 - (b) Pisces
 - (c) Protochordata
 - (d) Arthropoda

28. A process is represented in the adjacent figure. The arrows indicate the flow of a biochemical reaction. The arrowhead points to the product, while the base of the arrow indicates the template biomolecule. What do P, Q, R and S represent?



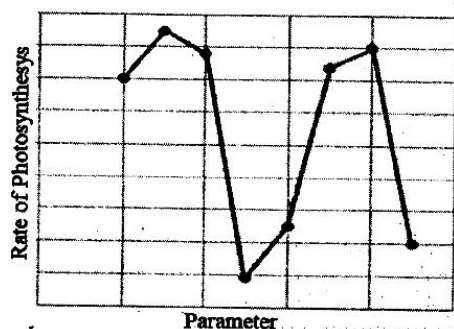
- (a) P: Replication, Q : Translation, R : Transcription, S : Reverse Transcription
 - (b) P : Transcription, Q : Replication, R : Reverse Transcription, S : Translation
 - (c) P : Reverse Transcription, Q : Replication, R : Translation, S : Transcription
 - (d) P : Reverse Transcription, Q : Replication, R : Transcription, S : Translation
29. The whooping cranes were on the verge of extinction with only 21 individuals in wild in 1941. After conservation measures, the cranes are now included in the endangered category by IUCN. The highlight of the conservation efforts is the reintroduction of the whooping cranes in wild. This was possible due to raising of the young cranes in absence of their parents by biologists dressed in crane costumes. Aircraft Guided bird migration technique was used for teaching the captive – bred cranes to follow the scientists to learn the migratory route. What type of animal behaviour might be responsible for these captive – bred cranes to follow the crane costume dressed scientists?
- (a) Cognitive learning
 - (b) Habituation
 - (c) Operant conditioning
 - (d) Genetic Imprinting

36. Any damage or injury to a particular area causes nociceptors to release some chemicals, which carry the signal to the higher centres in the nervous system for the processing and a subsequent action. However, there is a difference in the way in which the stimulus is received which is related to the acuity of the detection. Fingertips are more sensitive as compared to the forearm. Following reasons for the observed phenomenon were suggested.
- The receptive fields in the fingertip are smaller.
 - The number of nociceptors per receptive field in the forearm is lesser.
 - The amount of prostaglandins released by the nociceptors per receptive field is more in fingertips.

The most probable reason(s) for this may be:

- (a) i (b) i, iii
(c) ii, iii (d) i, ii, iii
37. On a study tour, plants with leathery leaves with thick cuticle, vivipary, salt glands, apogeotropic roots, and stomata limited to abaxial surface were observed. The plants might be:
- (a) Bromeliads (b) Cycads
(c) Mangroves (d) None of the above

38.



Rate of photosynthesis in hydrophytes depends on various parameters. The adjacent graph shows the effect of one parameter (while keeping all the others constant) on the rate of photosynthesis. Rate of photosynthesis is plotted on Y axis. Identify the parameter which is plotted along X axis.

- (a) light intensity (b) wavelength
(c) temperature (d) CO₂ concentration
39. A 4 μm long bacterial cell was magnified and drawn to a dimension of 6 cm. How many times has it been magnified?
- (a) 1.5 × 10³ (b) 15 × 10⁴
(c) 1.5 × 10⁴ (d) 1.5

40. Four different human body fluid samples were subjected to quantification of hydrogen ion concentration. mEq/L is the unit of measurement for hydrogen ion concentration. The results of the experiment were as follows:

Sample A : 1.6 × 10² units

Sample B : 4.5 × 10⁻⁵ units

Sample C : 1 × 10⁻³ units

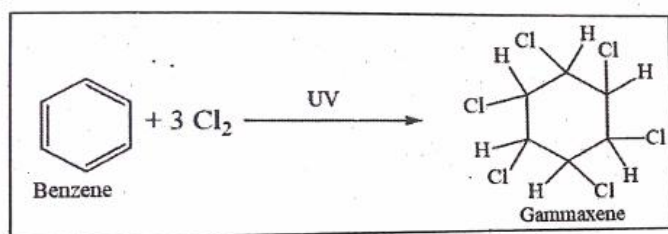
Sample D : 3 × 10⁻² units

Identify the samples in sequence from A to D

- (a) Gastric HCl, Venous blood, Intracellular Fluid, Urine
(b) Venous blood, Intracellular Fluid, Gastric HCl, Urine
(c) Urine, Gastric HCl, Venous blood, Intracellular Fluid
(d) Intracellular Fluid, Urine, Gastric HCl, Venous blood
41. Four gram of mixture of calcium carbonate and sand is treated with excess of HCl and 0.880 g of carbon-di-oxide is produced. What is the percentage of calcium carbonate in original mixture?
- (a) 40% (b) 50%
(c) 55% (d) 45%

42. How many sigma bonds are present between any two carbon atoms in fullerenes?
- (a) 1 (b) 2
(c) 3 (d) 4

43.



Gammaxene insecticide powder is prepared by the reaction given in the adjacent box. If 78 g of benzene were reacted with 106.5 g of chlorine, how much Gammaxene would be formed?

- (a) 140 g (b) 154.5 g
 (c) 145.5 g (d) 160 g

44. An element Y is a white translucent solid at room temperature and exhibits various allotropic forms. Some compounds of element Y find application in agricultural industry. Y forms two solid oxides which dissolve in water to form comparatively weak acids. The element Y is:

- (a) sulphur (b) nitrogen
 (c) phosphorus (d) carbon

45. A student was studying reactions of metals with dilute NaOH at room temperature. The student took dilute NaOH in four different test tubes and added copper powder to test tube A, zinc dust to test tube B, aluminium powder to test tube C and iron powder to test tube D and observed effervescence in _____

- (a) test tubes A & B (b) test tubes B & C
 (c) test tubes C & D (d) test tubes A & D

46. Which of the following polymeric material will be ideal for remoulding?

- (a) Polythene and melamine (b) Polyvinyl chloride and polythene
 (c) Melamine and bakelite (d) Bakelite and polyvinyl chloride

47. A magician performed following act: He dipped Rs 50 note in a 50% solution of alcohol in water and held it on the burning flame, but the note did not burn. The reason behind this is _____

- (a) the alcohol kept on dousing the fire
 (b) air required for burning was not available
 (c) the Rs 50 note failed to reach ignition temperature
 (d) The Rs 50 note is fire proof

48. Which of the following is iso-structural with CO_2 ?

- (a) NO_2 (b) N_2O_4
 (c) NO (d) N_2O

49. Substance X is white crystalline solid which melts after 10 seconds on burner flame. It is soluble in water and insoluble in CCl_4 . It is a poor conductor of electricity in molten state as well as in the form of aqueous solution, hence we conclude that substance X is

- (a) an ionic compound (b) a non-polar covalent compound
 (c) a polar covalent compound (d) a pure element

50. In a beaker 50 mL of a normal HCl solution was taken and NH_3 gas was passed through it for some time. The contents of the beaker were then titrated, which required 60 mL of semi normal NaOH solution. How much ammonia was passed through the beaker?

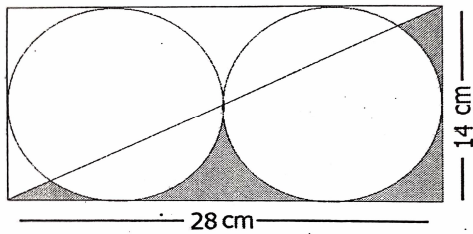
- (a) 0.85 g (b) 0.34 g
 (c) 0.51 g (d) 0.4 g

51. Which is the correct order of metals with reference to their melting point in increasing order?

- (a) Hg, Ga, Li, Ca (b) Ca, Li, Ga, Hg
 (c) Hg, Li, Ga, Ca (d) Hg, Ga, Ca, Li

52. Sodium tungstate has formula Na_2WO_4 , lead phosphate has formula $\text{Pb}_3(\text{PO}_4)_2$, formula for lead tungstate should be:
 (a) PbWO_4 (b) $\text{Pb}_2(\text{WO}_4)_3$
 (c) $\text{Pb}_3(\text{WO}_4)_2$ (d) $\text{Pb}_3(\text{WO}_4)_4$
53. What is the ratio of reducing agent to oxidizing agent, if the following reaction is correctly balanced?
 $\text{NH}_3 + \text{O}_2 \longrightarrow \text{NO} + \text{H}_2\text{O}$
 (a) 4:5 (b) 5:4
 (c) 5:3 (d) 3:5
54. Arrange the following solutions in increasing hydronium ion concentration. The solutions are:
 (P) 0.1 M HCl (Q) 0.1 M H_2SO_4
 (R) 0.001 M NH_4OH (S) 0.001 M $\text{Ca}(\text{OH})_2$
 The correct order will be
 (a) $\text{P} > \text{Q} > \text{R} > \text{S}$ (b) $\text{Q} > \text{P} > \text{S} > \text{R}$
 (c) $\text{S} > \text{R} > \text{Q} > \text{P}$ (d) $\text{S} > \text{R} > \text{P} > \text{Q}$
55. In one litre of pure water, 44.4 g of calcium chloride is dissolved. The number of ions in one mL of the resultant solution is:
 (a) 7.23×10^{23} (b) 7.23×10^{20}
 (c) 4.82×10^{23} (d) 4.82×10^{20}
56. A zinc rod was dipped in 100 cm^3 of 1 M copper chloride solution. After certain time the molarity of Cu^{2+} ions in the solution was found to be 0.8 M. If the weight of zinc rod is 20 g, then the molarity of chloride ions is _____
 (a) 2 M (b) 1.5 M
 (c) 1 M (d) 0.5 M
57. When four dilute solutions of (I) vinegar, (II) common salt, (III) caustic soda and (iv) baking soda are tested with universal indicator which will be the correct observation
 (a) I-Green, II-Violet, III-Blue, IV-Red (b) I-Green, II-Blue, III-Violet, IV-Red
 (c) I-Red, II-Green, III-Violet, IV-Blue (d) I-Red, II-Violet, III-Green, IV-Blue
58. Which of the following species is/are isoelectronic with Neon?
 (i) N^{3-} (ii) Mg^{2+}
 (iii) K^+ (iv) Ca^{2+}
 (a) only (iv) (b) only (ii)
 (c) both (i) & (ii) (d) both (i) and (iii)
59. Which of the following gases will have equal volume at STP, if the weight of gases is 14.0 g?
 (i) N_2O (ii) NO_2
 (iii) N_2 (iv) CO
 (a) (i) & (ii) (b) (i) and (i)
 (c) (ii) and (iii) (d) (iii) and (iv)
60. Which of the following are not ionic?
 (i) AlCl_3 (ii) CaCl_2 (iii) MgCl_2 (iv) LiCl
 (a) (i) and (iv) (b) (i) and (ii)
 (c) (ii) and (iii) (d) (iii) and (iv)
61. Apples dropping from apple trees were observed by many people before Newton. But why they fall, was explained by Issac Newton postulating the law of universal gravitation. Which of the following statements best describes the situation?
 (a) The force of gravity acts only on the apple
 (b) The apple is attracted towards the surface of the earth
 (c) Both earth and apple experience the same force of attraction towards each other
 (d) Apple falls due to earth's gravity and hence only (a) is true and (c) is absurd

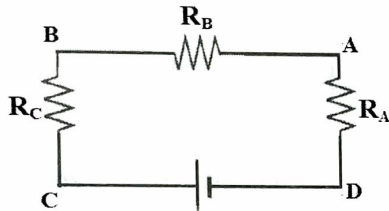
62.



A rectangular metal plate, shown in the adjacent figure has a charge of $420 \mu\text{C}$ assumed to be uniformly distributed over it. Then how much is the charge over the shaded area? No part of metal plate is cut. (Circles and the diagonal are shown for clarity only. $\pi = 22/7$)

(a) $45 \mu\text{C}$ (b) $450 \mu\text{C}$ (c) $15 \mu\text{C}$ (d) $150 \mu\text{C}$

63.



In the adjacent circuit, the voltages across AD, BD and CD are 2 V, 6 V and 8 V respectively. If resistance $R_A = 1 \text{ k}\Omega$, then the values of resistances R_B and R_C are _____ and _____ respectively.

(a) $4 \text{ k}\Omega$ and $6 \text{ k}\Omega$ (b) $2 \text{ k}\Omega$ and $1 \text{ k}\Omega$ (c) $1 \text{ k}\Omega$ and $2 \text{ k}\Omega$

(d) data insufficient as battery voltage is not given

64.

A new linear scale of temperature measurement is to be designed. It is called a 'Z scale' on which the freezing and boiling points of water are 20 Z and 220 Z respectively. What will be the temperature shown on the 'Z scale' corresponding to a temperature of 20°C on the Celsius scale?

(a) 10 Z

(b) 20 Z

(c) 40 Z

(d) 60 Z

65.

Consider the motion of a small spherical steel body of mass m , falling freely through a long column of a fluid that opposes its motion with a force proportional to its speed. Initially the body moves down fast, but after some time attains a constant velocity known as terminal velocity. If weight mg , opposing force (F_v) and buoyant force (F_b) act on the body, then the correct equation relating these forces, after the terminal velocity is reached, is

(a) $mg + F_v = F_b$ (b) $mg = F_v - F_b$ (c) $mg = F_v + F_b$

(d) none of these

66.

A piece of wire P and three identical cells are connected in series. An amount of heat is generated in a certain time interval in the wire due to passage of current. Now the circuit is modified by replacing P with another wire Q and N identical cells, all connected in series. Q is four times longer in length than P. The wire P and Q are of same material and have the same diameter. If the heat generated in second situation is also same as before in the same time interval, then find N.

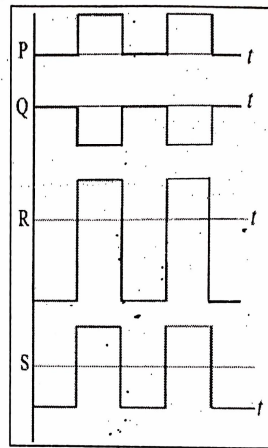
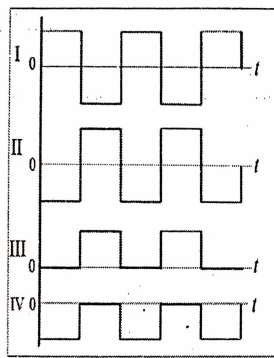
(a) 4

(b) 6

(c) 16

(d) 36

67.



Some waveforms among I, II, III and IV superpose (add graphically) to produce the waveforms P, Q, R and S. Among the following, match the pairs that give the correct combinations:

Resultant

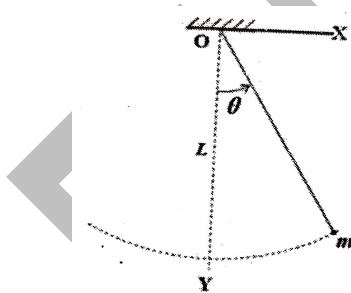
Superposition of

- | | |
|---|-------------------|
| P | (K) III and IV |
| Q | (L) II and IV |
| R | (M) I, II and III |
| S | (N) I and IV |
| | (O) II and III |

- | | |
|--|--|
| (a) $P \leftrightarrow O, Q \leftrightarrow N, R \leftrightarrow L, S \leftrightarrow M$ | (b) $P \leftrightarrow M, Q \leftrightarrow N, R \leftrightarrow L, S \leftrightarrow K$ |
| (c) $P \leftrightarrow M, Q \leftrightarrow N, R \leftrightarrow K, S \leftrightarrow L$ | (d) $P \leftrightarrow O, Q \leftrightarrow M, R \leftrightarrow L, S \leftrightarrow K$ |

68. At any instant of time, the total energy (E) of a simple pendulum is equal to the sum of its kinetic energy $\left(\frac{1}{2}mv^2\right)$ and potential energy $\left(\frac{1}{2}kx^2\right)$, where, m is the mass, v is the velocity, x is the displacement of the bob and k is a constant for the pendulum. The amplitude of oscillation of the pendulum is 10 cm and its total energy is 4 mJ. Find k.
- (a) 1.8 Nm^{-1} (b) 0.8 Nm^{-1} (c) 0.5 Nm^{-1} (d) data insufficient

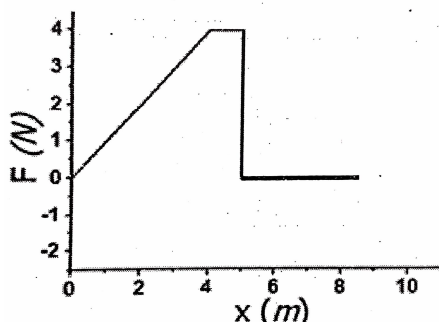
69.



A rigid body of mass m is suspended from point O using an inextensible string of length L. When it is displaced through an angle θ , what is the change in the potential energy of the mass? (Refer adjacent figure.)

- | | |
|------------------------------|------------------------------|
| (a) $mg L (1 - \cos \theta)$ | (b) $mg L (\cos \theta - 1)$ |
| (c) $mg L \cos \theta$ | (d) $mg L (1 - \sin \theta)$ |

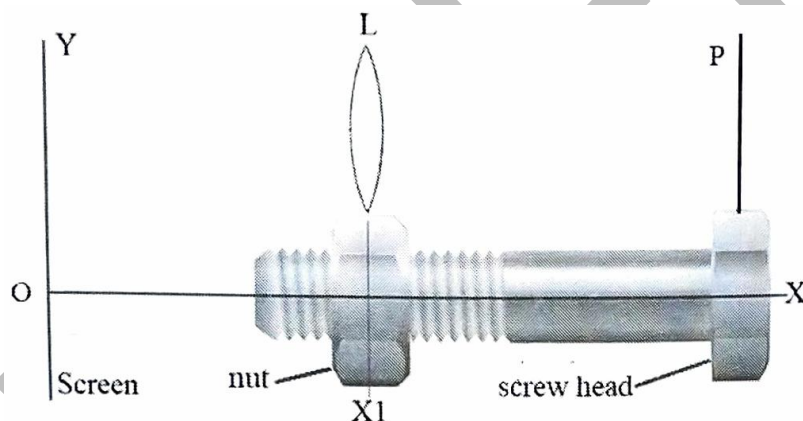
70.



Refer to the adjacent figure. A variable force F is applied to a body of mass 6 kg at rest. The body moves along x-axis as shown. The speed of the body at $x = 5 \text{ m}$ and $x = 6 \text{ m}$ is _____ and _____ respectively.

- | | |
|------------------|------------------|
| (a) 0 m/s, 0 m/s | (b) 0 m/s, 2 m/s |
| (c) 2 m/s, 2 m/s | (d) 2 m/s, 4 m/s |

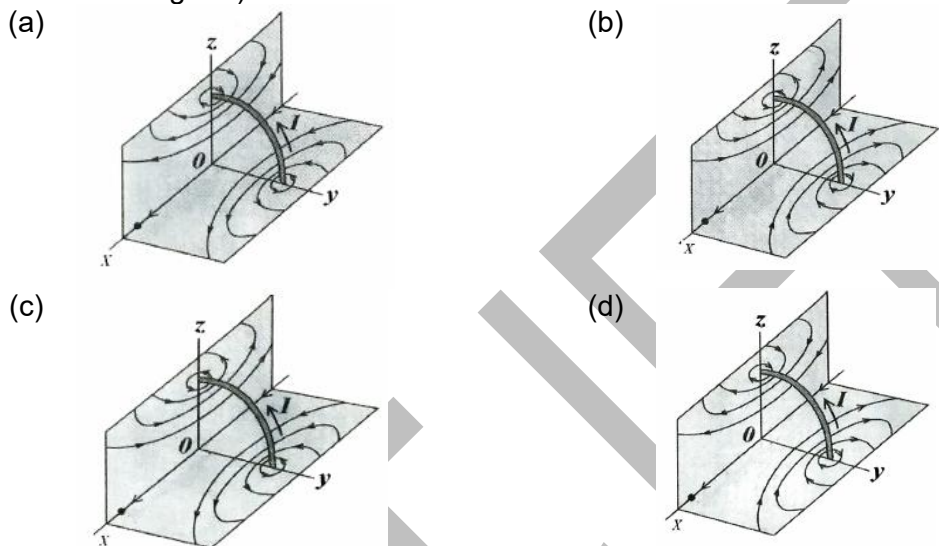
71. When a charged particle with charge q and mass m enters uniform magnetic field B with velocity v at right angles to B , the force on the moving particle is given by qvB . This force acts as the centripetal force making the charged particle go in a uniform circular motion with radius $r = \frac{mv}{Bq}$. Now if a hydrogen ion and a deuterium ion enter the magnetic field with velocities in the ratio 2 : 1 respectively, then the ratio of their radii will be _____ .
 (a) 1 : 2 (b) 2 : 1 (c) 1 : 4 (d) 1 : 1
72. A piece of ice is floating in water at 4°C in a beaker. When the ice melts completely, the water level in the beaker will
 (a) rise (b) fall (c) remains unchanged (d) unpredictable
73. In a screw-nut assembly (shown below) the nut is held fixed in its position and the screw is allowed to rotate inside it. A convex lens (L) of focal length 6.0 cm is fixed on the nut. An object pin (P) is attached to the screw head. The image of the object is observed on a screen Y . When the screw head to rotated through one rotation, the linear distance moved by the screw tip is 1.0mm. The observation are made only when the image is obtained in the same orientation on the screen. At a certain position of P , the image formed is three times magnified as that of the pin height. Through how many turns should the screw head be rotated so that the image is two times magnified?



- (a) 8 (b) 10 (c) 12 (d) 14
74. A school is located between two cliffs. When the metal bell is struck by school attendant. First echo is heard by him after 2.4 s and second echo follows after 2.0 s for him at the same position near the bell. If the velocity of sound in air is 340 ms^{-1} at the temperature of the surroundings, then the distance between the cliffs is approximately _____ .
 (a) 0.488 km (b) 0.751 km (c) 1.16 km (d) 1.41 km
75. The triangular face of a crown glass prism ABC is isosceles. Length $AB = \text{length } AC$ and the rectangular face with edge AC is silvered. A ray of light is incident normally on rectangular face with edge AB . It undergoes reflections at AC and AB internally and it emerges normally through the rectangular base with edge BC . Then angle BAC of the prism is _____
 (a) 24° (b) 30° (c) 36° (d) 42°
76. The radius of curvature of a convex mirror is ' x '. The distance of an object from focus of this mirror is ' y '. Then what is the distance of image from the focus?
 (a) $y^2 / 4x$ (b) x^2 / y (c) $x^2 / 4y$ (d) $4y^2 / x$

77. A physics teacher and his family are travelling in a car on a highway during a severe lightning storm. Choose the correct option:
- Safest place will be inside the car as the charges due to lightning tend to remain on the metal sheet / skin of the vehicle if struck by lightning.
 - It's too dangerous to be inside the car. As the car has a metal body the charges tend to accumulate on the surface and will generate a strong electric field inside the car.
 - Safest place is under a tree. It's better to get drenched under a tree as the wet tree will provide a path to the charges for earthing.
 - It is safer to exit the car and stand on open ground.

78. A conductor in the form of a circular loop is carrying current I . The direction of the current is as shown. Then which figure represents the correct direction of magnetic field line on the surfaces of the plane XY and XZ. (Consider those surfaces of XY and XZ planes which are seen in the figure.)



79. A particle experiences constant acceleration for 20 s after starting from rest. If it travels a distance S_1 in the first 10 s and distance S_2 in the next 10 s, the relation between S_1 and S_2 is:

- $S_2 = 3S_1$
- $S_1 = 3S_2$
- $S_2 = 2S_1$
- $S_1 = 10S_2$

80. A sound wave is produced by a vibrating metallic string stretched between its ends. Four statements are given below. Some of them are correct.

- Sound wave is produced inside the string.
- Sound wave in the string is transverse.
- Wave length of the sound wave in surrounding air is equal to the wavelength of the transverse wave on the string.
- Loudness of sound is proportional to the square of the amplitude of the vibrating string.

Choose the correct option.

- P
- R and S
- P and Q
- S